



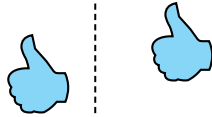
Determine if the shape is translating (slide), rotating (turn) or reflecting (flip).

Answers


1)



2)



3)




1. _____

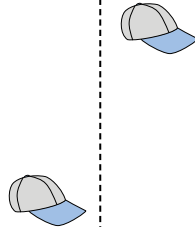
2. _____

3. _____

4)



5)



6)



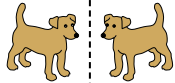
4. _____

5. _____


6. _____

7. _____

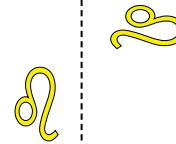
7)



8)



9)



8. _____

9. _____

10. _____

11. _____

10)



11)



12)



12. _____

13. _____

14. _____

15. _____



13)



14)



15)



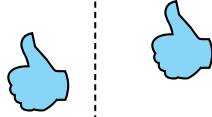


Determine if the shape is translating (slide), rotating (turn) or reflecting (flip).


1)



2)



3)



Answers

1. **reflecting**

2. **translating**

3. **rotating**

4. **reflecting**

5. **translating**

6. **rotating**

7. **reflecting**

8. **translating**

9. **rotating**

10. **reflecting**

11. **translating**


12. **rotating**

13. **reflecting**

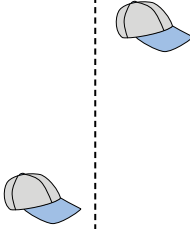
14. **translating**

15. **rotating**

4)



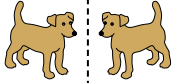
5)




6)




7)



8)



9)



10)



11)



12)



13)



14)



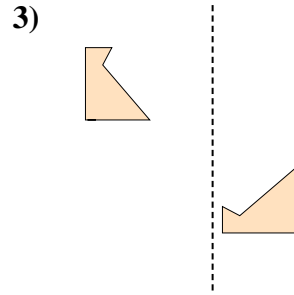
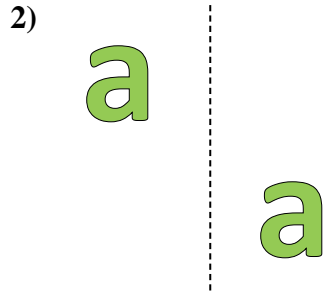
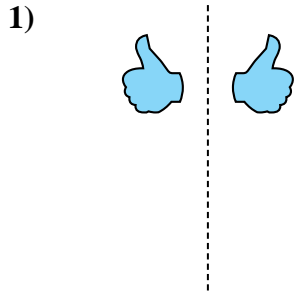
15)





Determine if the shape is translating (slide), rotating (turn) or reflecting (flip).

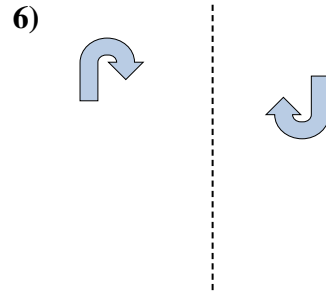
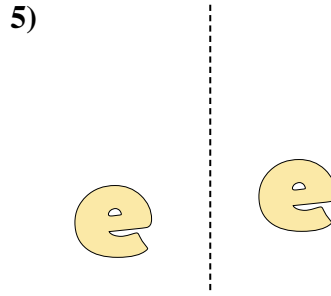

Answers



1. _____

2. _____

3. _____

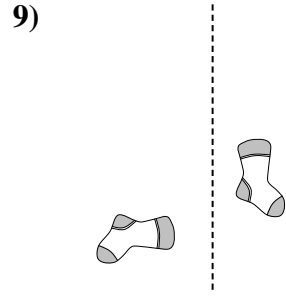
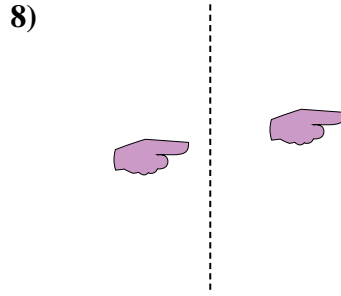
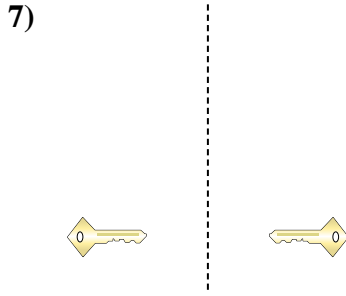


4. _____

5. _____

6. _____

7. _____


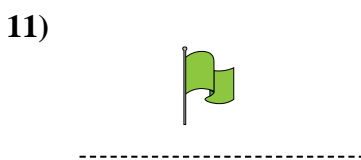
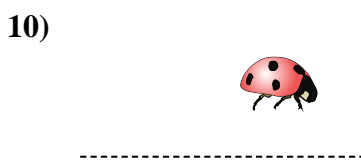


8. _____

9. _____

10. _____

11. _____



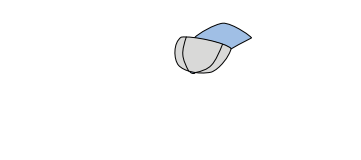

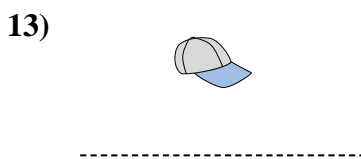



12. _____

13. _____

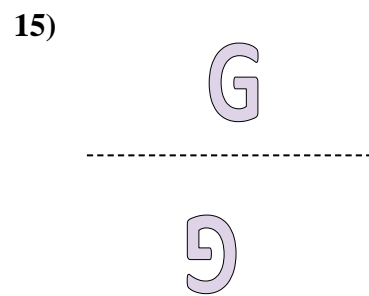
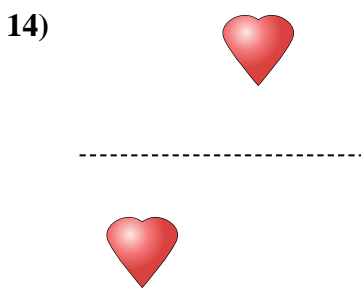
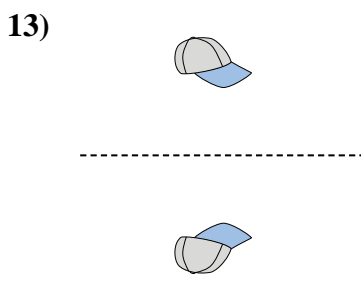
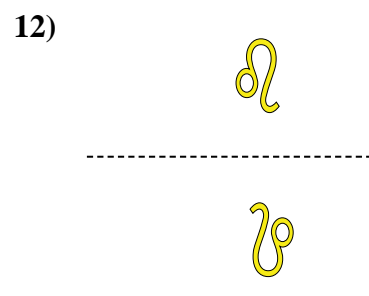
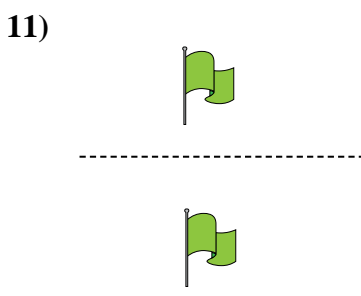
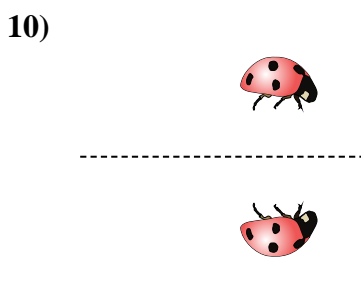
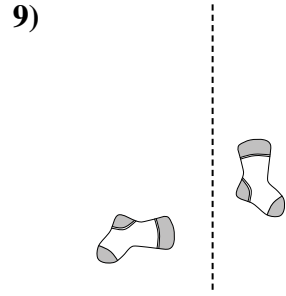
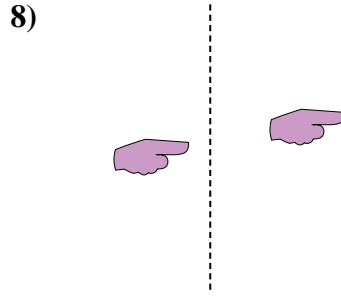
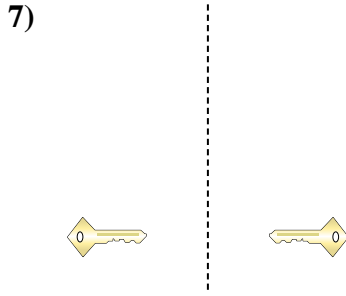
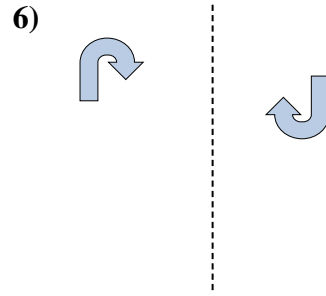
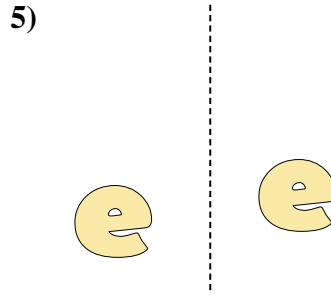

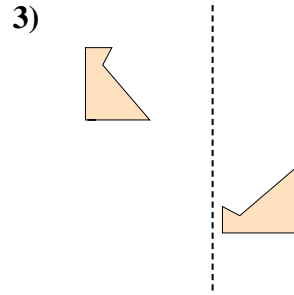
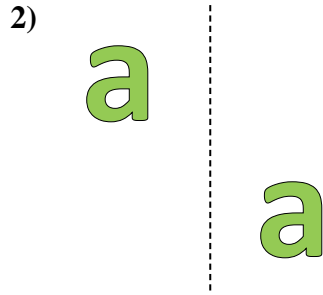
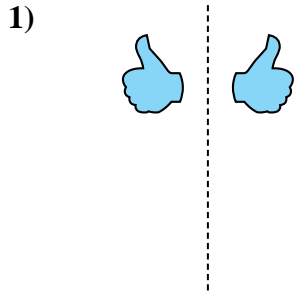
14. _____

15. _____





Determine if the shape is translating (slide), rotating (turn) or reflecting (flip).



Answers

1. reflecting

2. translating

3. rotating

4. reflecting

5. translating

6. rotating

7. reflecting

8. translating

9. rotating

10. reflecting

11. translating

12. rotating

13. reflecting

14. translating


15. rotating




Determine if the shape is translating (slide), rotating (turn) or reflecting (flip).

Answers

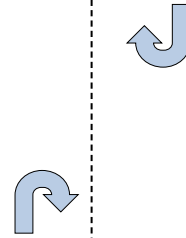
1)



2)



3)



1. _____

2. _____

3. _____

4. _____

5. _____

6. _____

7. _____

8. _____

9. _____

10. _____

11. _____

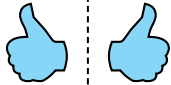
12. _____

13. _____

14. _____

15. _____

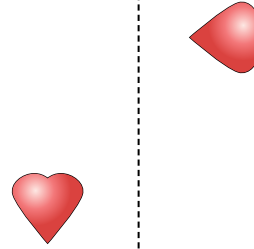
4)



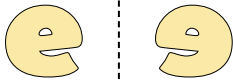
5)



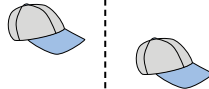
6)



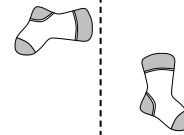
7)



8)



9)



10)



11)



12)



13)



14)




15)






Determine if the shape is translating (slide), rotating (turn) or reflecting (flip).

1)



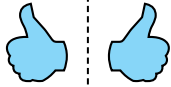
2)



3)



4)



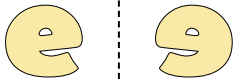
5)



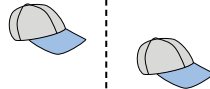
6)



7)



8)



9)



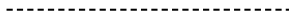

10)



11)



12)



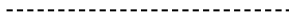
13)



14)



15)



Answers

1. **reflecting**

2. **translating**

3. **rotating**

4. **reflecting**

5. **translating**

6. **rotating**

7. **reflecting**

8. **translating**

9. **rotating**

10. **reflecting**

11. **translating**

12. **rotating**

13. **reflecting**

14. **translating**

15. **rotating**



Determine if the shape is translating (slide), rotating (turn) or reflecting (flip).

Answers

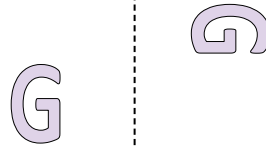
1)



2)



3)



1. _____

2. _____

3. _____

4. _____

5. _____

6. _____

7. _____

8. _____

9. _____

10. _____

11. _____


12. _____

13. _____


14. _____

15. _____

4)



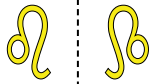
5)



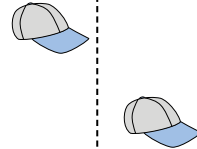
6)



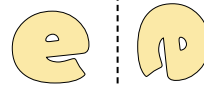
7)



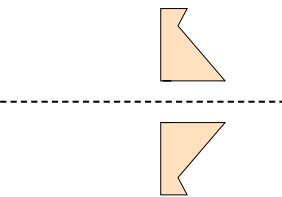
8)




9)



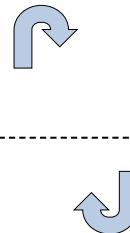
10)




11)



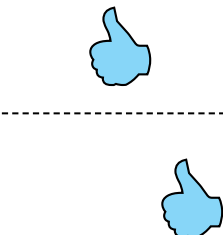
12)



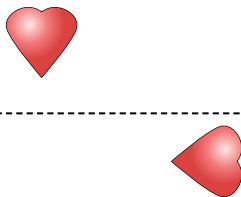
13)



14)



15)



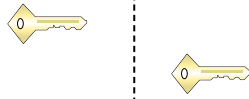


Determine if the shape is translating (slide), rotating (turn) or reflecting (flip).

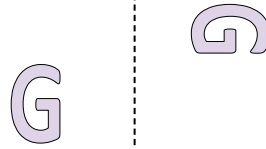
1)



2)



3)



Answers

1. **reflecting**

2. **translating**

3. **rotating**

4. **reflecting**

5. **translating**

6. **rotating**

7. **reflecting**

8. **translating**

9. **rotating**

10. **reflecting**

11. **translating**


12. **rotating**

13. **reflecting**


14. **translating**

15. **rotating**

4)



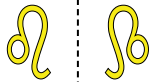
5)



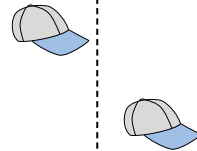
6)



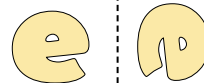
7)



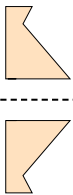
8)




9)



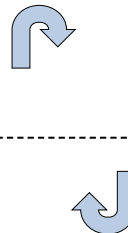
10)




11)



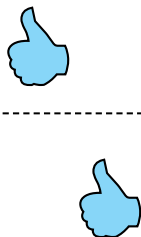
12)



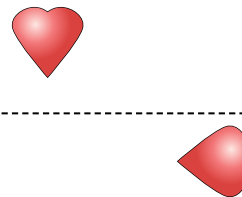
13)



14)



15)






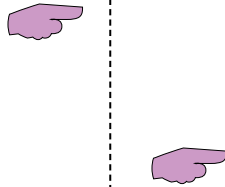
Determine if the shape is translating (slide), rotating (turn) or reflecting (flip).

Answers


1)



2)



3)

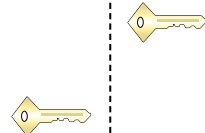


1. _____

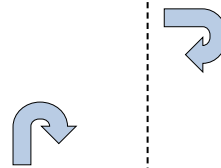
4)



5)



6)



2. _____

3. _____

4. _____

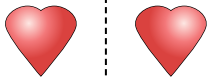
5. _____

6. _____

7. _____

8. _____

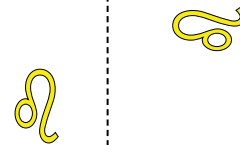
7)



8)



9)

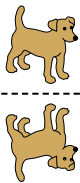


9. _____

10. _____

11. _____


10)



11)



12)




12. _____

13. _____


14. _____

15. _____


13)



14)

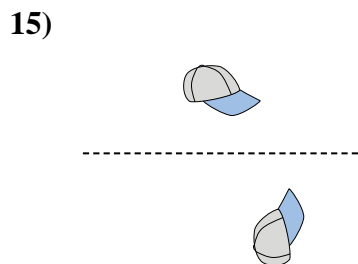
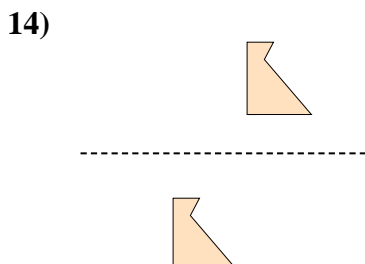
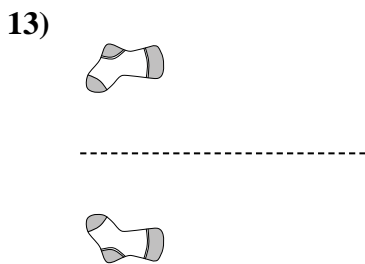

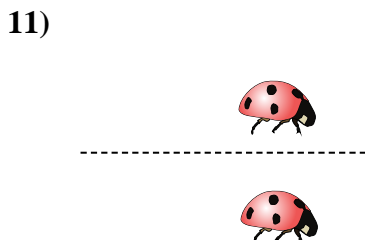
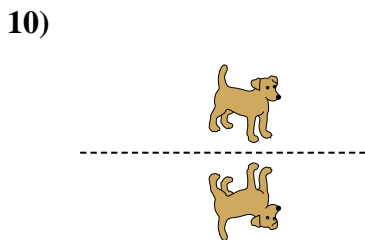
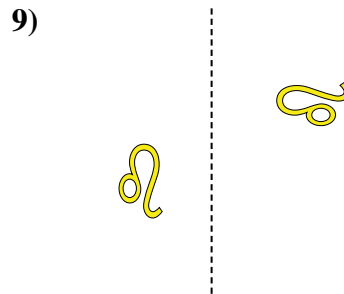
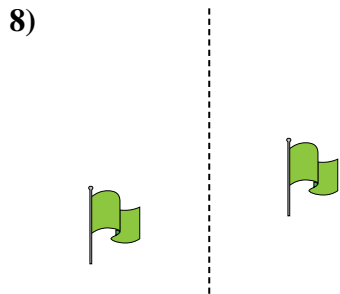
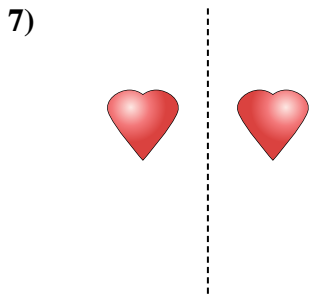
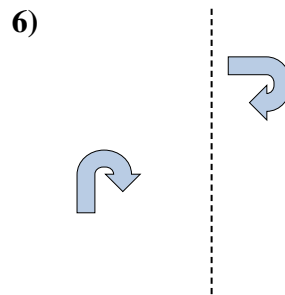
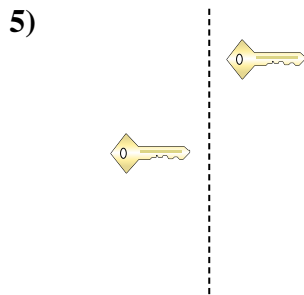
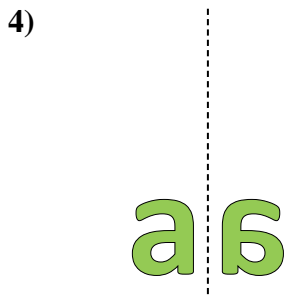
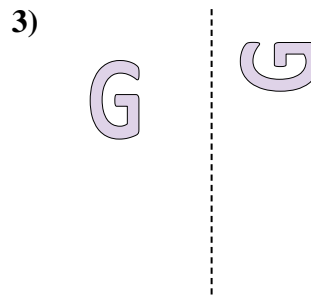
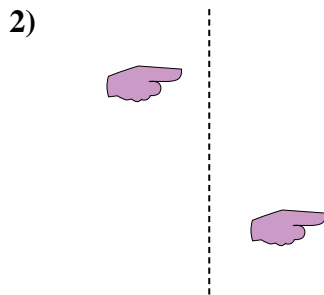
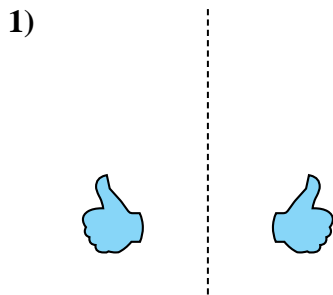


15)





Determine if the shape is translating (slide), rotating (turn) or reflecting (flip).



Answers


1. reflecting
2. translating
3. rotating
4. reflecting
5. translating
6. rotating
7. reflecting
8. translating
9. rotating
10. reflecting
11. translating
12. rotating
13. reflecting
14. translating
15. rotating




Determine if the shape is translating (slide), rotating (turn) or reflecting (flip).

Answers

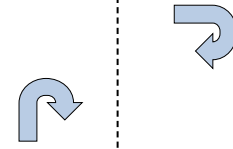
1)



2)



3)



1. _____

2. _____

3. _____

4. _____

5. _____

6. _____

7. _____

8. _____

9. _____

10. _____

11. _____


12. _____

13. _____

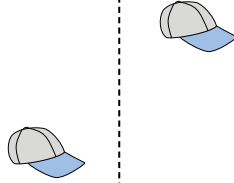
14. _____

15. _____


4)




5)




6)



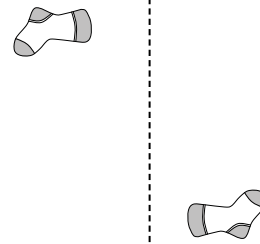
7)



8)



9)



10)



11)



12)



13)



14)




15)






Determine if the shape is translating (slide), rotating (turn) or reflecting (flip).

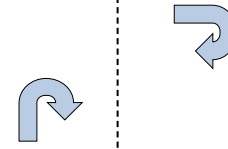
1)



2)



3)




Answers

1. reflecting

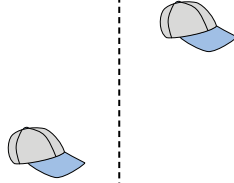
2. translating

3. rotating


4)



5)



6)




4. reflecting


5. translating

6. rotating

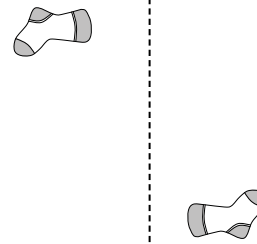
7)



8)



9)



7. reflecting

8. translating

9. rotating

10)



11)



12)



10. reflecting

11. translating

12. rotating



13. reflecting

14. translating

15. rotating

13)



14)



15)






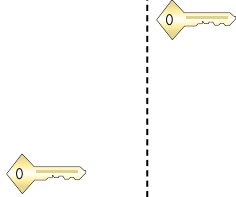
Determine if the shape is translating (slide), rotating (turn) or reflecting (flip).

Answers

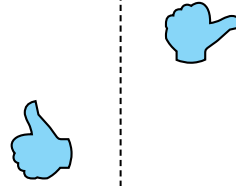
1)



2)



3)




1. _____

2. _____


3. _____

4. _____

4)



5)



6)



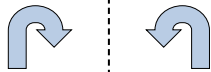
5. _____

6. _____

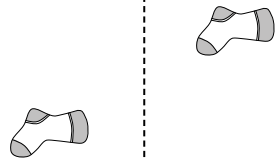
7. _____

8. _____

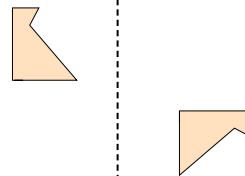
7)



8)



9)



9. _____

10. _____

11. _____

10)



11)



12)



13. _____

14. _____

15. _____



13)



14)




15)





Determine if the shape is translating (slide), rotating (turn) or reflecting (flip).

1)




2)



3)



4)



5)



6)



7)



8)



9)



10)



11)



12)



13)



14)



15)



Answers

1. **reflecting**

2. **translating**

3. **rotating**

4. **reflecting**

5. **translating**

6. **rotating**

7. **reflecting**

8. **translating**

9. **rotating**

10. **reflecting**

11. **translating**

12. **rotating**

13. **reflecting**

14. **translating**

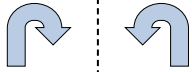
15. **rotating**




Determine if the shape is translating (slide), rotating (turn) or reflecting (flip).

Answers

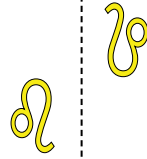
1)



2)



3)



1. _____

2. _____

3. _____

4. _____

5. _____

6. _____

7. _____

8. _____

9. _____

10. _____

11. _____

12. _____

13. _____

14. _____

15. _____

4)




5)



6)



7)



8)



9)



10)



11)



12)



13)



14)

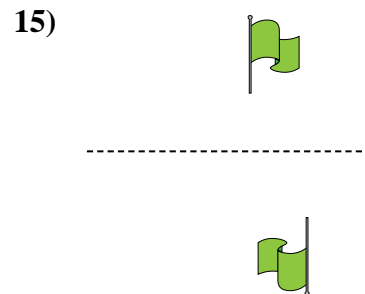
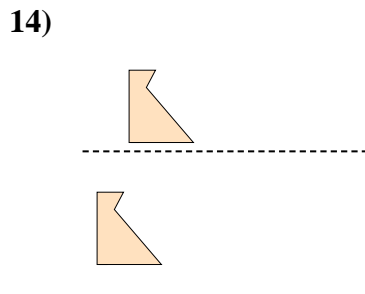
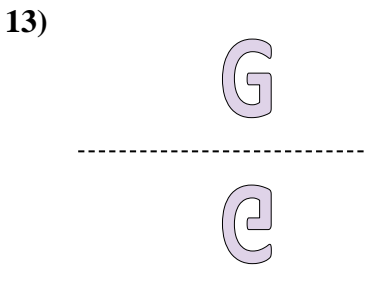
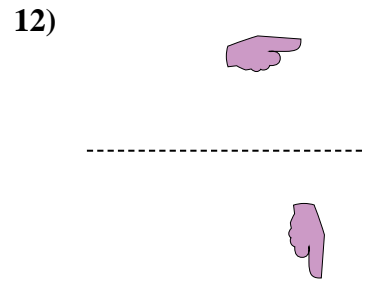
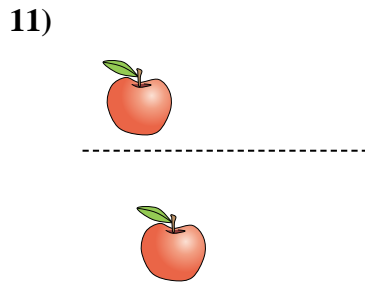
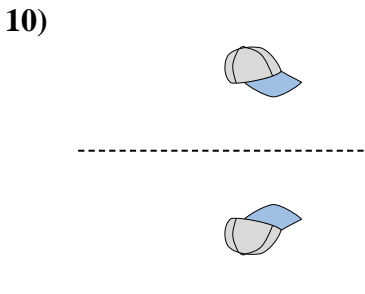
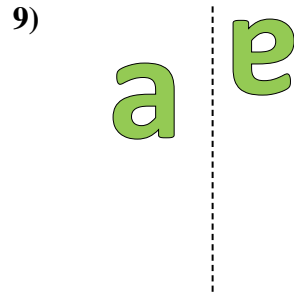
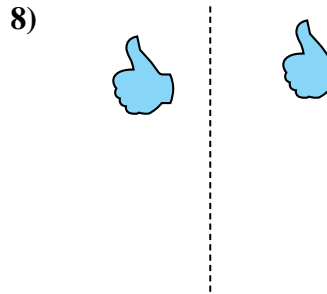
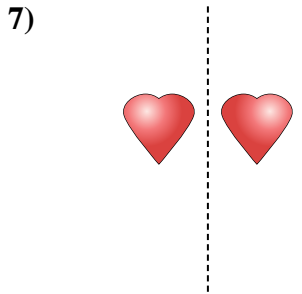
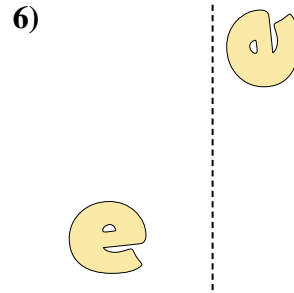
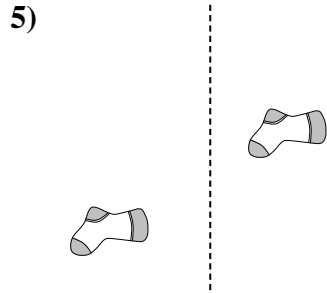
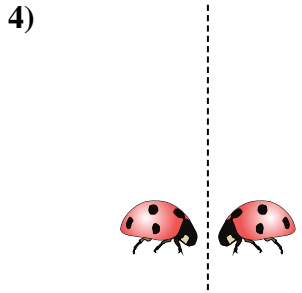
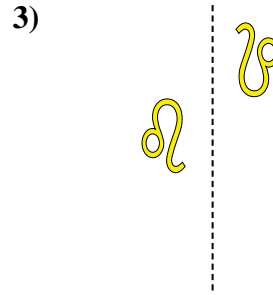
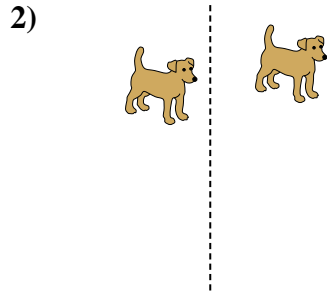
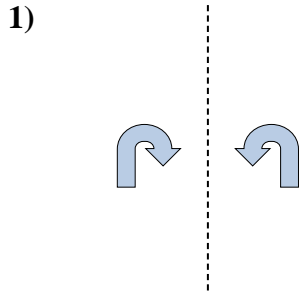


15)





Determine if the shape is translating (slide), rotating (turn) or reflecting (flip).



Answers

1. reflecting

2. translating

3. rotating

4. reflecting

5. translating

6. rotating

7. reflecting

8. translating

9. rotating

10. reflecting

11. translating

12. rotating

13. reflecting

14. translating


15. rotating



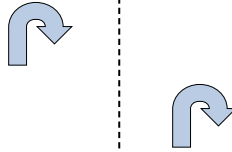
Determine if the shape is translating (slide), rotating (turn) or reflecting (flip).

Answers


1)



2)



3)



1. _____

2. _____

3. _____

4. _____

5. _____

6. _____

7. _____

8. _____

9. _____

10. _____

11. _____

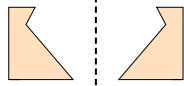
12. _____

13. _____

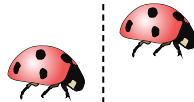
14. _____

15. _____

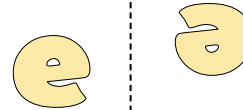
4)



5)



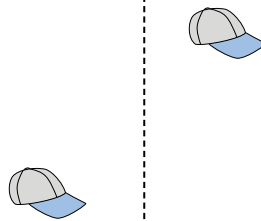
6)



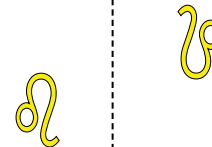
7)



8)



9)



10)



11)



12)



13)



14)




15)



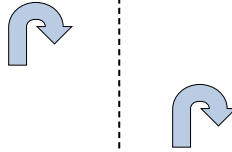


Determine if the shape is translating (slide), rotating (turn) or reflecting (flip).


1)



2)



3)



Answers

1. **reflecting**

2. **translating**

3. **rotating**

4. **reflecting**

5. **translating**

6. **rotating**

7. **reflecting**

8. **translating**

9. **rotating**

10. **reflecting**

11. **translating**

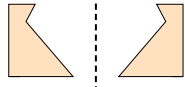
12. **rotating**

13. **reflecting**


14. **translating**

15. **rotating**

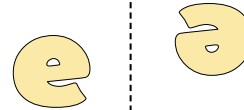
4)



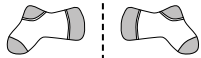
5)



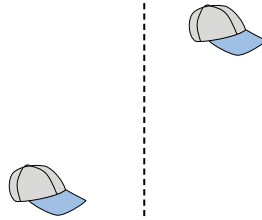
6)



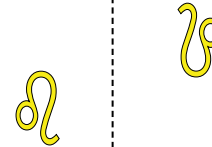
7)



8)



9)



10)



11)



12)



13)



14)



15)






Determine if the shape is translating (slide), rotating (turn) or reflecting (flip).

Answers

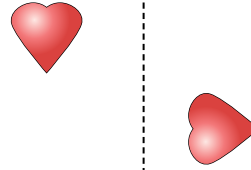
1)



2)



3)




1. _____

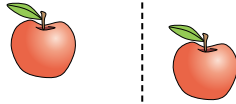
2. _____

3. _____

4)



5)



6)

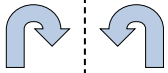


4. _____

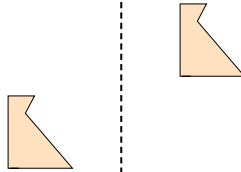
5. _____

6. _____

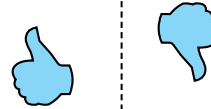
7)



8)



9)



7. _____

8. _____

9. _____

10. _____

11. _____

10)



11)



12)



12. _____

13. _____

14. _____

15. _____



13)



14)



15)





Determine if the shape is translating (slide), rotating (turn) or reflecting (flip).

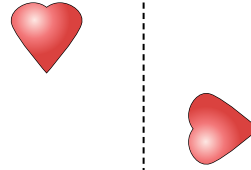
1)



2)



3)



Answers

1. reflecting

2. translating

3. rotating

4. reflecting

5. translating

6. rotating

7. reflecting

8. translating

9. rotating

10. reflecting

11. translating


12. rotating

13. reflecting

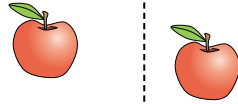
14. translating

15. rotating

4)



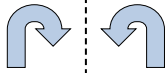
5)



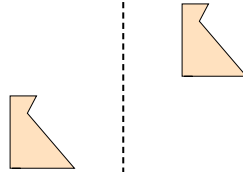
6)



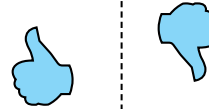
7)



8)



9)



10)



11)



12)



13)



14)



15)

